



DIPS SCHOOL UGGI

chain of dips institution



HOLIDAY HOMEWORK



Grade 2



GRADE II



NAME:
ROLL.NO:

HAPPY HOLIDAYS

- Do your worksheets nicely
with pencil and
try to make it very colorful
&



Take printout of all worksheets and fill with neat and clean handwriting.

DIPS EDUCATIONAL RESEARCH AND DEVELOPMENT BOARD

Holidays Homework

Name _____

Grade-II.

Subject-Hindi

1. नीचे दिए गए वाक्यों से मौसम पहचान कर उनके सामने उसे मौसम का नाम लिखिए।

(क) गुड़ गाना खाने को मिलता है। _____

(ख) फूल खिल उठते हैं। _____

(ग) लोग शरबत पीते हैं। _____

Bi (घ) पेड़ दुखी हो जाते हैं। _____

(ङ) काले बादल छा जाते हैं। _____

2. अनुच्छेद:- मेरा मित्र/मेरी सहेली (अपनी सहेली या मित्र की तस्वीर चिपकाए और उसके बारे में कोई पांच लाइन लिखे)।

3. सही स्थान पर बिंदु (.) या चंद्रबिंदु (ँ.) अर्धचंद्र (ँ) लगाइए।

1. सगीता
2. राकेट
3. चाद
4. अदर
5. गाव

DIPS EDUCATIONAL RESEARCH AND DEVELOPMENT BOARD

Holiday Homework

Name_____

Grade-II

SUBJECT-ENGLISH

Marks : 15

Read the passage and answer the questions. 5 Marks

Lily was a little girl who loved flowers. She had a small garden in front of her house where she grew many colorful flowers. Every morning, Lily would water her flowers and talk to them. She believed that talking to flowers made them happy and helped them grow.

One day, while watering her garden, Lily noticed a tiny seed on the ground. She picked it up and planted it in her garden. Every day, she took special care of the seed, watering it and giving it plenty of sunshine.

After a few weeks, the seed grew into a beautiful sunflower. Lily was so excited! The sunflower was tall and bright, and it made her garden look even more beautiful.

I)What did Lily love?

- a) Animals
- b) Flowers
- c) Trees

II)Where did Lily have her garden?

- a) In front of her house
- b) In her backyard
- c) On the roof

III)What did Lily find on the ground one day?

- a) A flower
- b) A leaf
- c) A tiny seed

IV)What did Lily do with the seed?

- a) She threw it away

b) She planted it in her garden

Hic) She gave it to her friend

V)What did the seed grow into?

a) A rose

b) A sunflower

c) A tulip

Q2.Make Sentences of the given words. 5 Marks

a) Repair

b)Favourite

c)Machine

d)Children

e)Morning

Q3. Fill in the blanks with the correct joining words (and, or, but, because). Marks: 5

a I like apples _____ bananas.

b.Do you want to play now _____ later?

c.She was tired _____ she kept working.

d.The dog barked _____ the cat ran away.

e.I stayed at home _____ it was raining.

.

DIPS EDUCATIONAL RESEARCH AND DEVELOPMENT BOARD

Subject -Maths

1. Divide the following using repeated subtraction. (3marks)

(a) $9 \div 3$

(b) $8 \div 2$

2. Complete the multiplication and division facts for the following.

(3marks)

Multiplication fact. Division facts

1. $8 \times 6 = 48$ (a) $48 \div 6 = 8$

(b) $48 \div \underline{\quad} = \underline{\quad}$

2. $3 \times 4 = \underline{\quad}$. (a) $12 \div 3 = \underline{\quad}$

(b) $\underline{\quad} \div \underline{\quad} = \underline{\quad}$

3. Divide the following using long division method. (3marks)

a) $2 \sqrt{12}$

Quotient: $\underline{\quad}$

(b) $7 \sqrt{70}$

Quotient: ___

(c) $6\sqrt{24}$

Quotient: ___

4. Fill in the blanks. (3 marks)

a. $24 \div 6 = \underline{\quad}$

b. $27 \div 9 = \underline{\quad}$

c. $14 \div 2 = \underline{\quad}$

5. Solve the division problem. (3 marks)

Rohan purchases 20 pencils. He divides them equally among his friends. If each friend gets 4 pencils, how many friends were there.

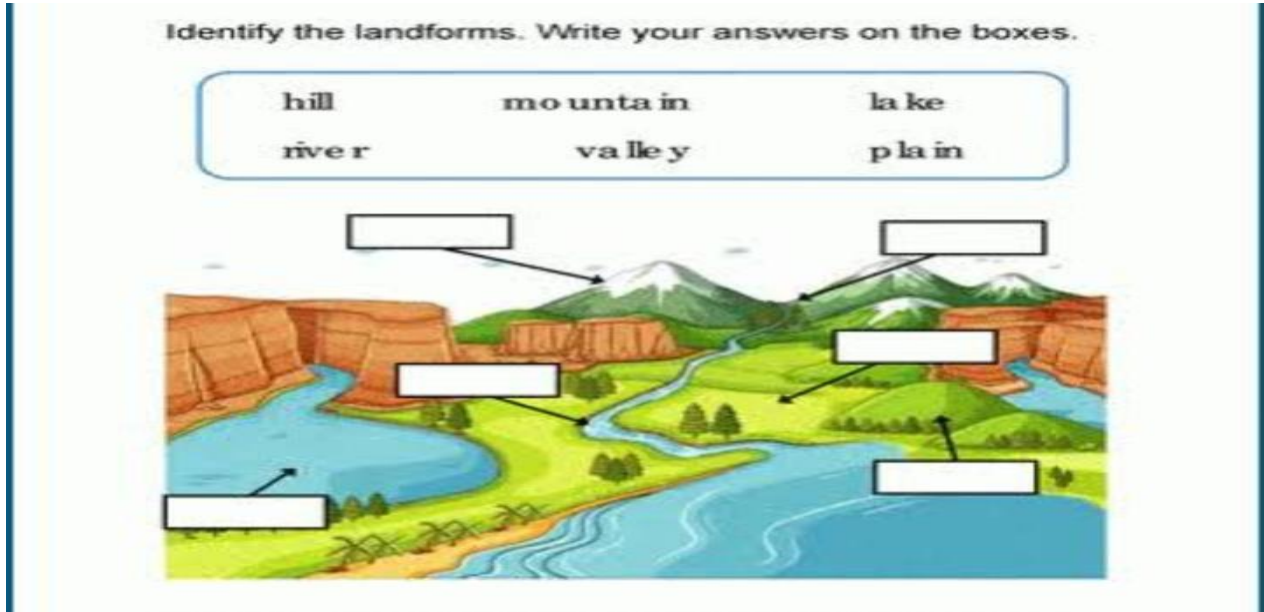
DIPS EDUCATIONAL RESEARCH AND DEVELOPMENT BOARD

Name _____

Subject -EVS

T .Marks-15

.Marks-2



Answer these questions Marks -7.5

1.Ques:- What is globe? Draw a picture of globe.

ANS:-_____

2.Ques:-Write the difference between hills and mountains

Hills	Mountains

3Ques:- Write the different types of water bodies and draw their pictures .

- Ans:-**1. _____
2. _____
3. _____
4. _____
5. _____

B) Fill in the blanks. Marks-2.5

- 1 . Flat lands are called _____.
- 2.The tip of a Mountain is called it's _____.
3. _____ is the largest ocean in the world.
4. _____ Is the largest river in the world.
- 5.The height of the Mount Everest is _____.

C. Roll no 1to 16. Marks:- 3

Fill a shallow tray with the sand. Mould the sand to create different landforms such as mountains, hills, valley and rivers.

Roll no-17 to 32

Draw or print out a picture of a desert and cut it out .Glue the desert onto the poster board ,leaving enough space for other landforms .Use yellow or brown construction paper to cut out cacti or sand dunes and glue them onto the desert area.

DIPS EDUCATIONAL RESEARCH AND DEVELOPMENT BOARD

PUNJABI ASSIGNMENT

Grade -II

(ਕੁੱਲ ਅੰਕ - 15)


1. ਠੀਕ ਉੱਤਰ ਤੇ ਸਹੀ(✓) ਦਾ ਨਿਸ਼ਾਨ ਲਗਾਓ : (3)

ੳ) ਸਾਨੂੰ ਸੜਕ  ਤੇ ਕਿਹੜੇ ਹੱਥ ਚੱਲਣਾ ਚਾਹੀਦਾ ਹੈ ?

ਖੱਬੇ () ਸੱਜੇ ()

ਅ) ਪਤੰਗ  ਕਿੱਥੇ ਨਹੀਂ  ਉਡਾਉਣੇ ਚਾਹੀਦੇ?

ਕੋਠਿਆਂ ਤੇ () ਮੈਦਾਨ ਵਿੱਚ ()

ੲ) ਨਿਮ ਦੀ ਕਿਹੜੀ ਚੀਜ਼ ਨਾਲ ਦੰਦ  ਮਜ਼ਬੂਤ ਹੁੰਦੇ ਹਨ ?

ਪੱਤੇ () ਦਾਣ ()

2. ਖਾਲੀ ਥਾਵਾਂ ਭਰੋ - (2)


1) ਨਿਮ ਦਾ ਰੁੱਖ  _____ ਛਾਂ ਦਿੰਦਾ ਹੈ।


2)  _____ ਬੱਤੀ ਹੋਣ ਤੇ ਜ਼ਰੂਰ ਰੁਕੇ ।

3. ਵਾਕਾਂ ਵਿੱਚ ਵਰਤੋ :- (2)


ੳ) ਪਤੰਗ  - _____ ।

ਅ) ਮੈਦਾਨ - _____ ।


4) ਸਹੀ(✓) ਗਲਤ() ਨਿਸ਼ਾਨ ਲਗਾਓ (3)

ੳ) ਸੜਕ  ਤੇ ਚੱਲਣ ਦੇ ਨਿਯਮਾਂ ਦੀ ਪਾਲਣਾ ਕਰੋ ()

ਅ) ਨਿਮ ਦੇ ਫਲ ਨੂੰ ਨਮੋਲੀਆ ਕਹਿੰਦੇ ਹਨ ()

ੲ) ਨਿਮ ਦਾ ਰੁੱਖ  ਛਾਂ ਨਹੀਂ ਦਿੰਦਾ ()

5) ਹੇਠ ਦਿੱਤੇ ਪ੍ਰਸ਼ਨਾਂ ਦੇ ਉੱਤਰ ਲਿਖੋ : (3)

ੳ) ਬਾਈਕ  ਚਲਾਉਂਦੇ ਸਮੇਂ ਕਿਸੇ ਤੇ ਗੱਲਾਂ ਨਹੀਂ ਕਰਨੀਆਂ ਚਾਹੀਦੀਆਂ ?

ਅ) ਪਤੰਗ  ਕਿੱਥੇ ਜਾ ਕੇ ਉਡਾਉਣੇ ਚਾਹੀਦੇ ਹਨ ?



Edit with WPS Office

ੲ) ਨਿਮ ਦੇ ਫਲ ਨੂੰ ਕੀ ਕਹਿੰਦੇ ਹਨ?

6) ਹੇਠ ਦਿੱਤੇ ਸ਼ਬਦਾਂ ਦੀ ਵਚਨ ਬਦਲੀ ਕਰੋ :- (2)

ਪਤੰਗ  = _____   

ਹੱਥ  = _____   

